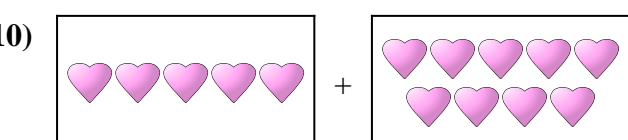
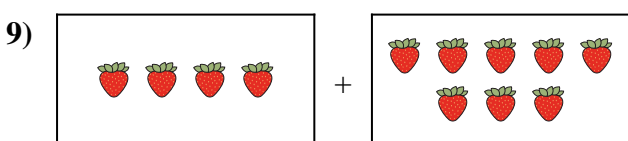
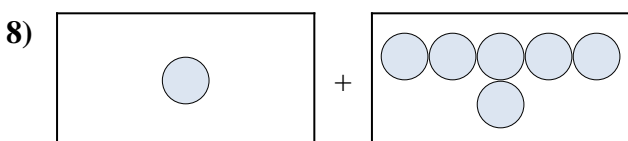
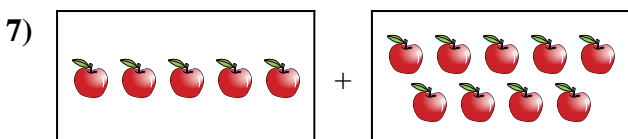

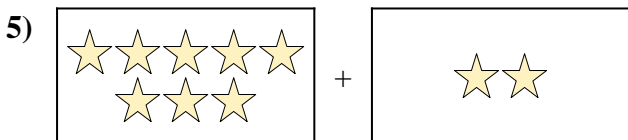
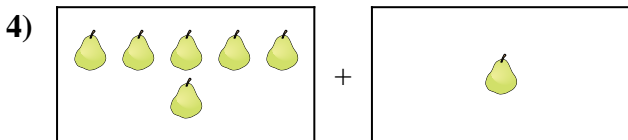
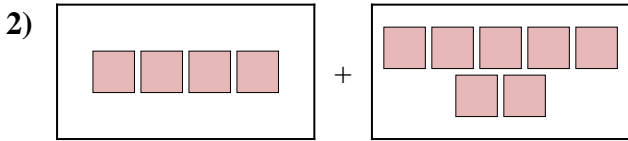
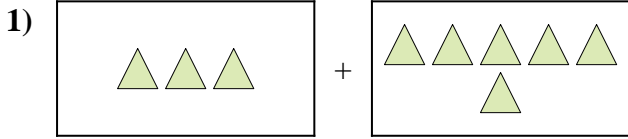




Express the visual problem as an equation with answer.

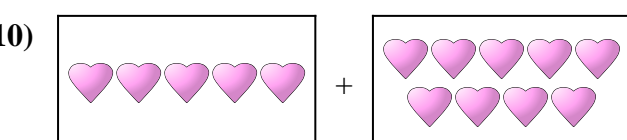
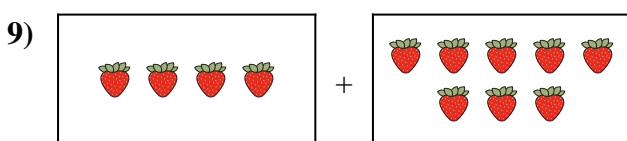
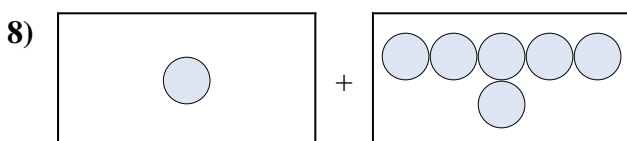
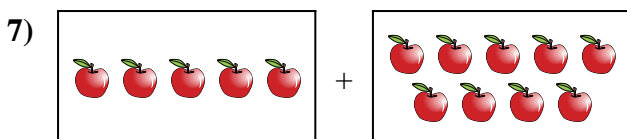

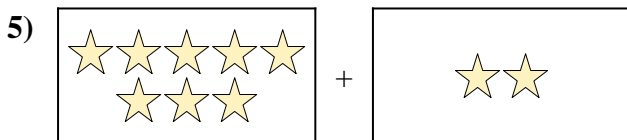
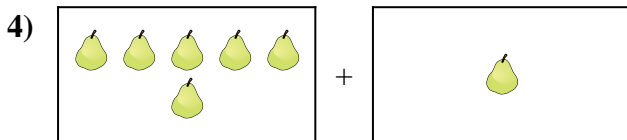
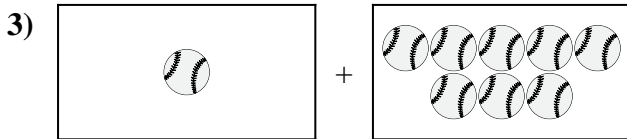
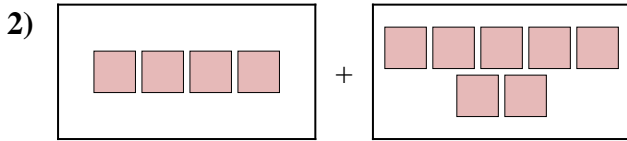
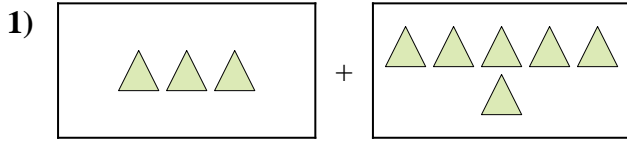
Answers



1. \_\_\_\_\_
2. \_\_\_\_\_
3. \_\_\_\_\_
4. \_\_\_\_\_
5. \_\_\_\_\_
6. \_\_\_\_\_
7. \_\_\_\_\_
8. \_\_\_\_\_
9. \_\_\_\_\_
10. \_\_\_\_\_



Express the visual problem as an equation with answer.



Answers

1.  $3 + 6 = 9$

2.  $4 + 7 = 11$

3.  $1 + 8 = 9$

4.  $6 + 1 = 7$

5.  $8 + 2 = 10$

6.  $10 + 9 = 19$

7.  $5 + 9 = 14$

8.  $1 + 6 = 7$

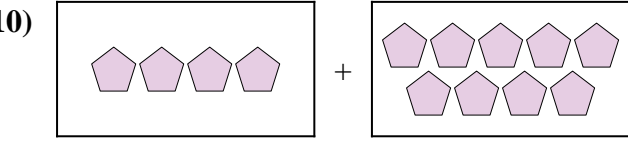
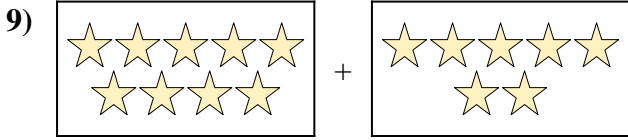
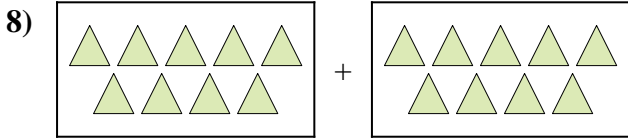

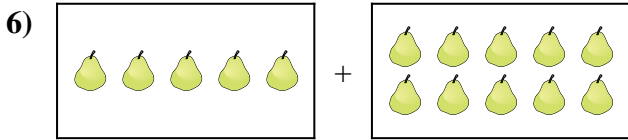
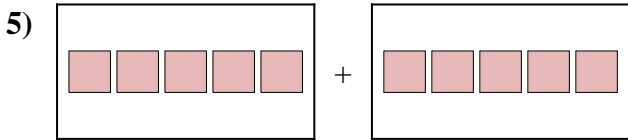
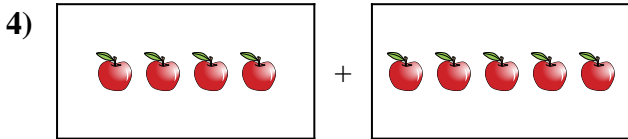

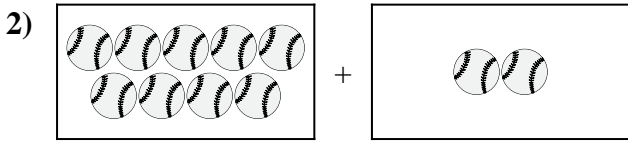

9.  $4 + 8 = 12$

10.  $5 + 9 = 14$



Express the visual problem as an equation with answer.

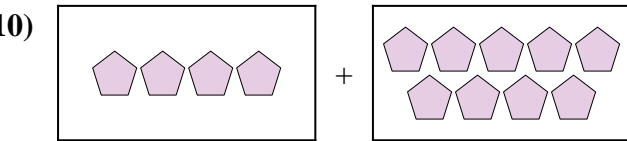
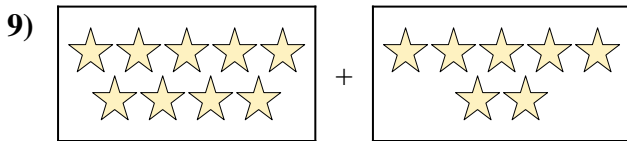
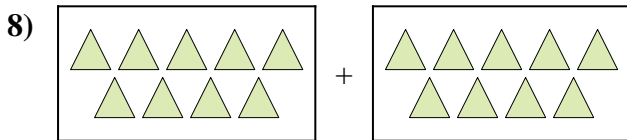

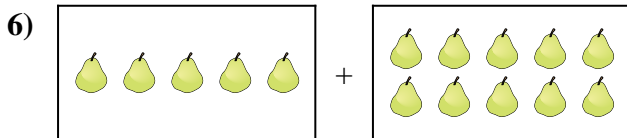
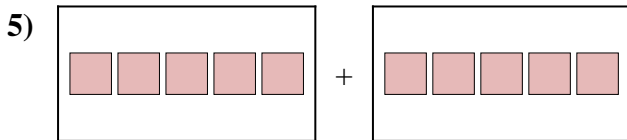
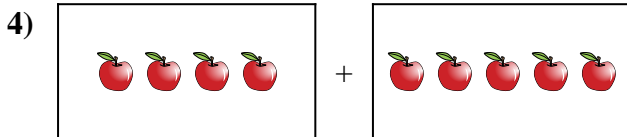

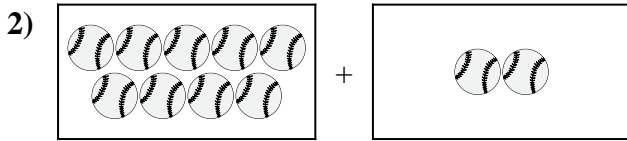

Answers



1. \_\_\_\_\_
2. \_\_\_\_\_
3. \_\_\_\_\_
4. \_\_\_\_\_
5. \_\_\_\_\_
6. \_\_\_\_\_
7. \_\_\_\_\_
8. \_\_\_\_\_
9. \_\_\_\_\_
10. \_\_\_\_\_



Express the visual problem as an equation with answer.



Answers

1.  $8 + 7 = 15$

2.  $9 + 2 = 11$

3.  $8 + 7 = 15$

4.  $4 + 5 = 9$

5.  $5 + 5 = 10$

6.  $5 + 10 = 15$

7.  $5 + 7 = 12$

8.  $9 + 9 = 18$

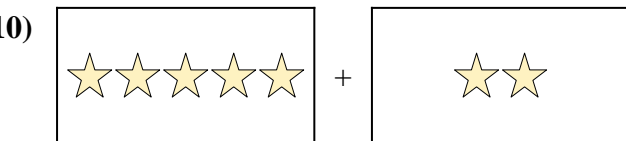
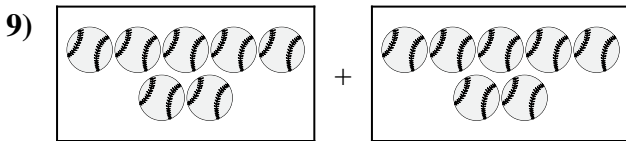
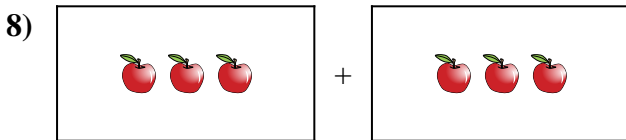
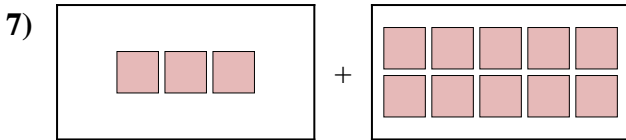
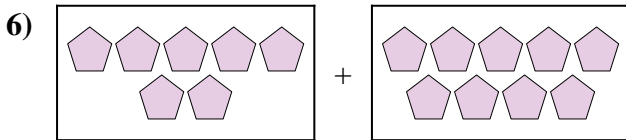
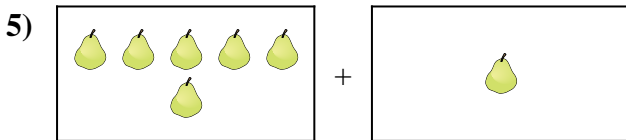
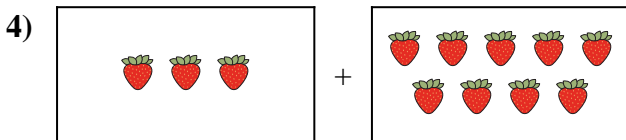
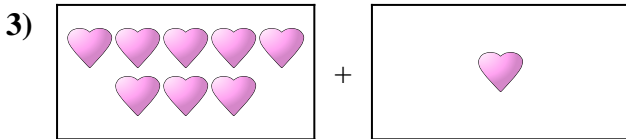
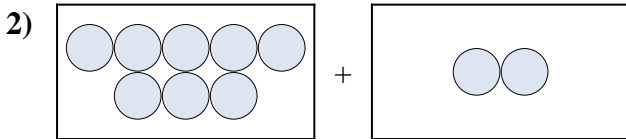

9.  $9 + 7 = 16$

10.  $4 + 9 = 13$



Express the visual problem as an equation with answer.

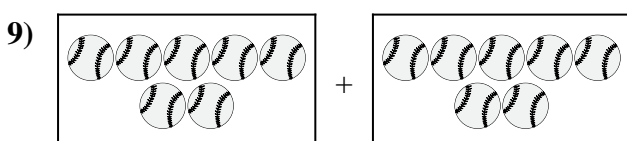
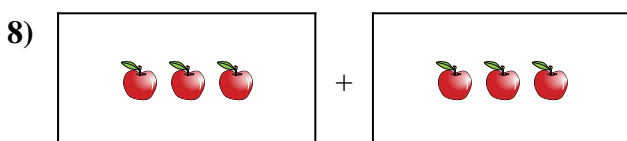
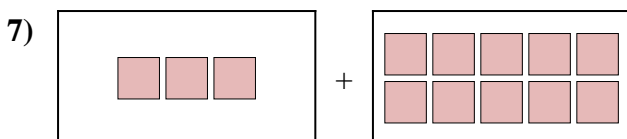
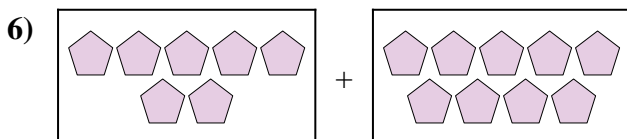
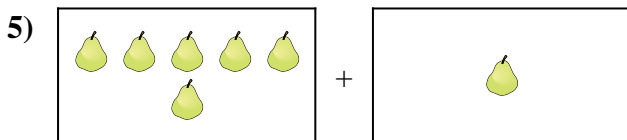
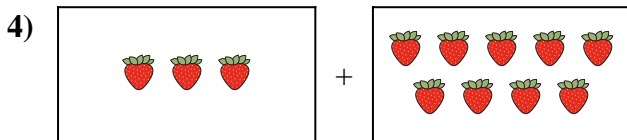
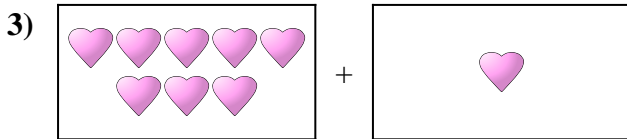
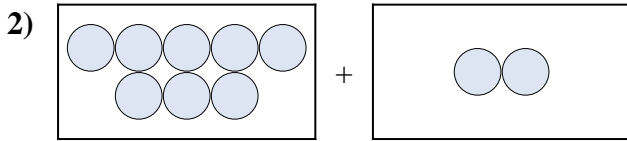

Answers



1. \_\_\_\_\_
2. \_\_\_\_\_
3. \_\_\_\_\_
4. \_\_\_\_\_
5. \_\_\_\_\_
6. \_\_\_\_\_
7. \_\_\_\_\_
8. \_\_\_\_\_
9. \_\_\_\_\_
10. \_\_\_\_\_



Express the visual problem as an equation with answer.



Answers

1.  $9 + 1 = 10$

2.  $8 + 2 = 10$

3.  $8 + 1 = 9$

4.  $3 + 9 = 12$

5.  $6 + 1 = 7$

6.  $7 + 9 = 16$

7.  $3 + 10 = 13$

8.  $3 + 3 = 6$

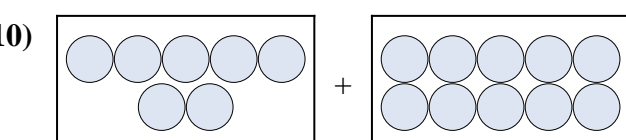

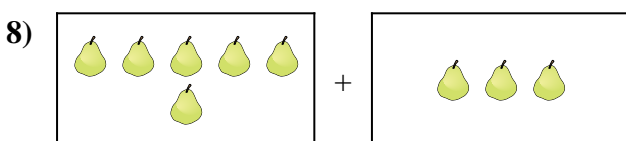

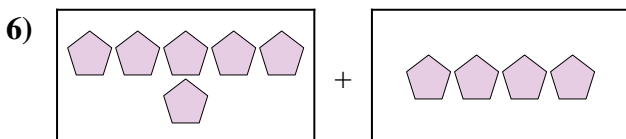
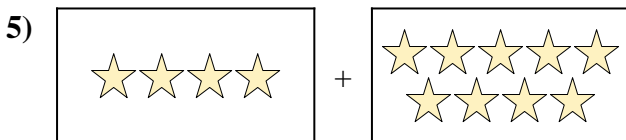
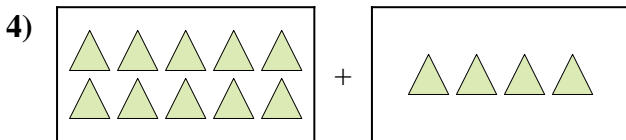
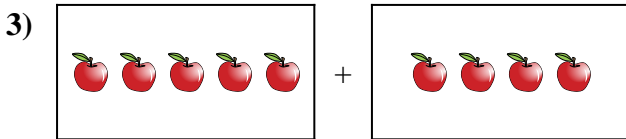

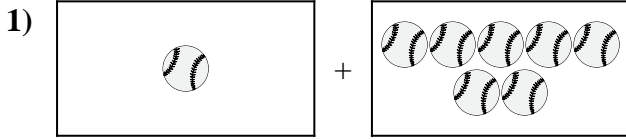
9.  $7 + 7 = 14$

10.  $5 + 2 = 7$



Express the visual problem as an equation with answer.

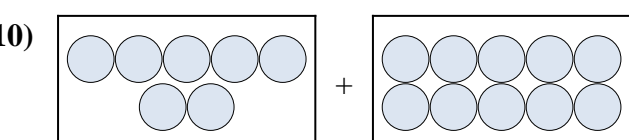

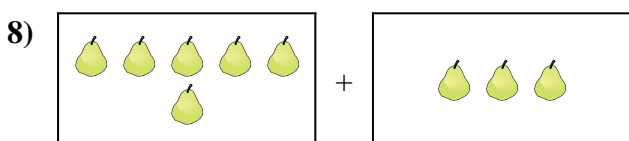

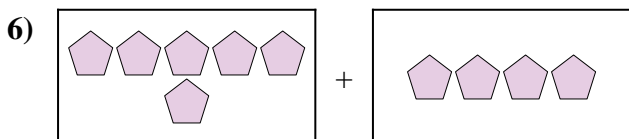
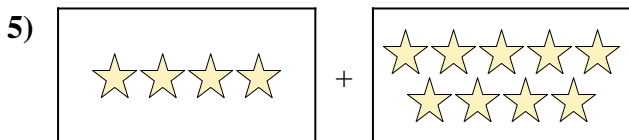
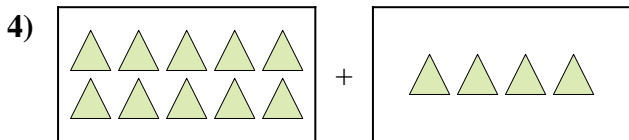
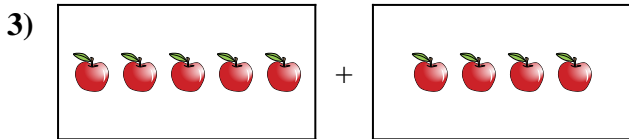
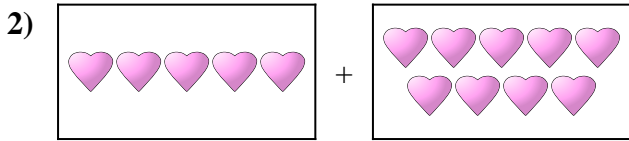
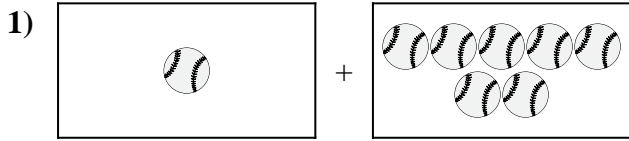
Answers



1. \_\_\_\_\_
2. \_\_\_\_\_
3. \_\_\_\_\_
4. \_\_\_\_\_
5. \_\_\_\_\_
6. \_\_\_\_\_
7. \_\_\_\_\_
8. \_\_\_\_\_
9. \_\_\_\_\_
10. \_\_\_\_\_



Express the visual problem as an equation with answer.



Answers

1.  $1 + 7 = 8$

2.  $5 + 9 = 14$

3.  $5 + 4 = 9$

4.  $10 + 4 = 14$

5.  $4 + 9 = 13$

6.  $6 + 4 = 10$

7.  $6 + 10 = 16$

8.  $6 + 3 = 9$

9.  $7 + 4 = 11$

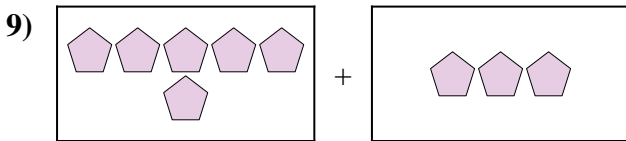
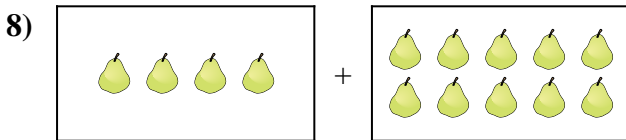
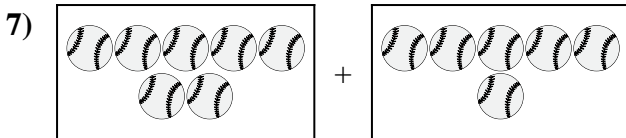

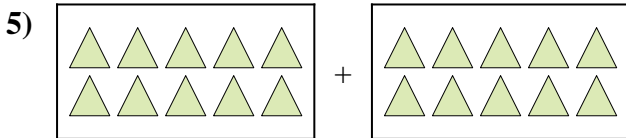
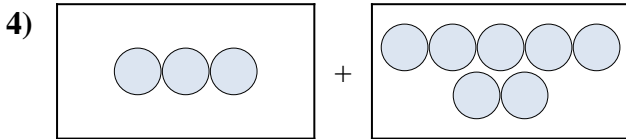
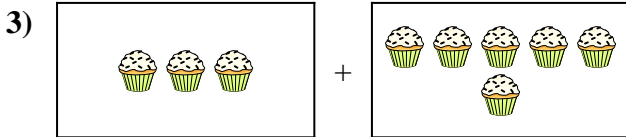
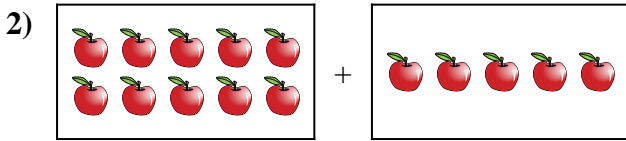
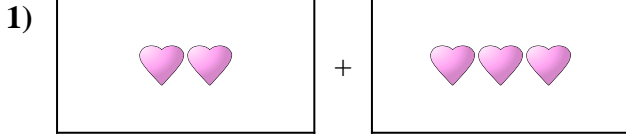
10.  $7 + 10 = 17$





Express the visual problem as an equation with answer.

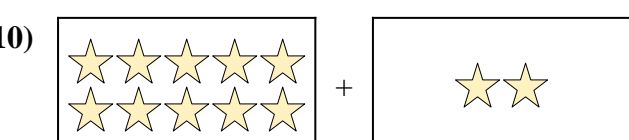
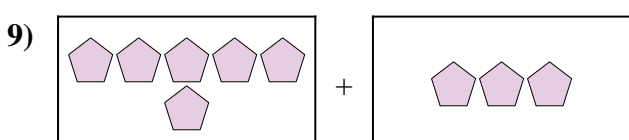
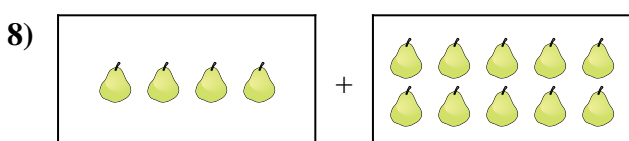
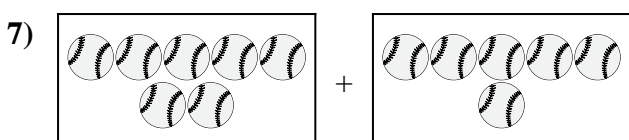

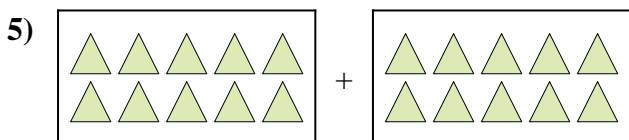
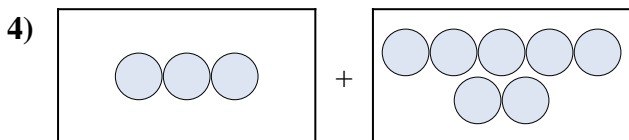

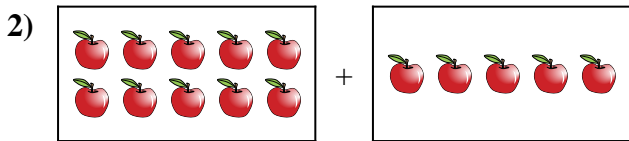
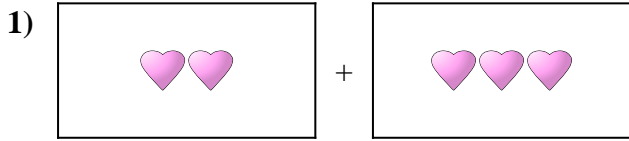
Answers



1. \_\_\_\_\_
2. \_\_\_\_\_
3. \_\_\_\_\_
4. \_\_\_\_\_
5. \_\_\_\_\_
6. \_\_\_\_\_
7. \_\_\_\_\_
8. \_\_\_\_\_
9. \_\_\_\_\_
10. \_\_\_\_\_



Express the visual problem as an equation with answer.



Answers

1.  $2 + 3 = 5$

2.  $10 + 5 = 15$

3.  $3 + 6 = 9$

4.  $3 + 7 = 10$

5.  $10 + 10 = 20$

6.  $10 + 3 = 13$

7.  $7 + 6 = 13$

8.  $4 + 10 = 14$

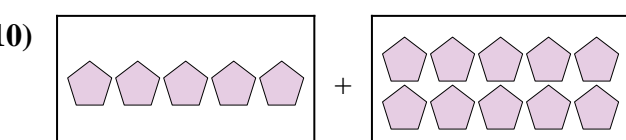
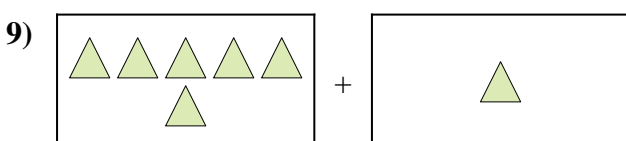
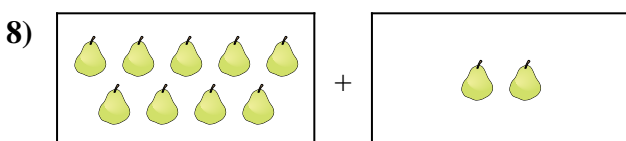
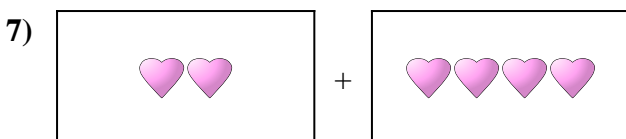
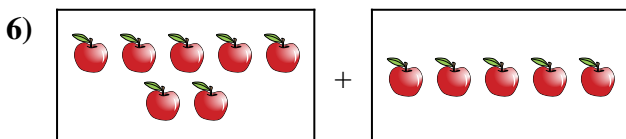
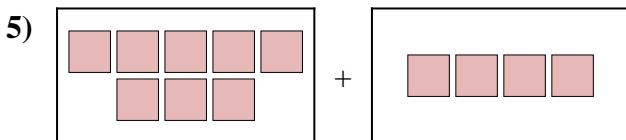
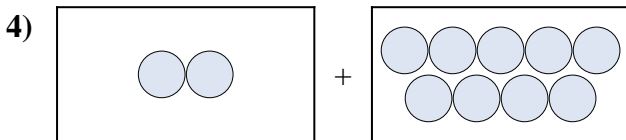
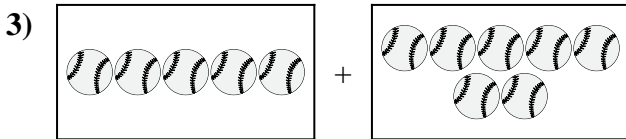

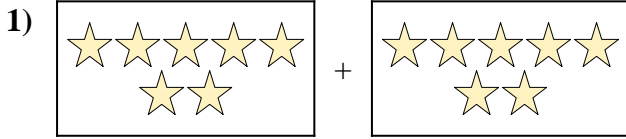
9.  $6 + 3 = 9$

10.  $10 + 2 = 12$



Express the visual problem as an equation with answer.

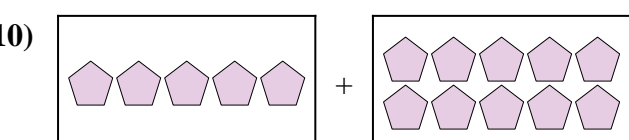
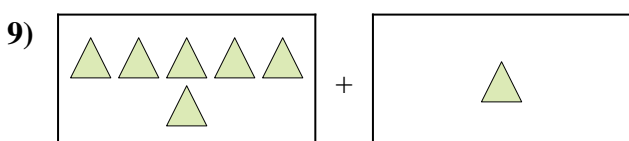
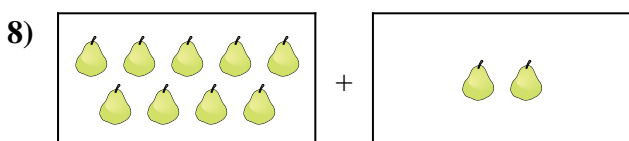
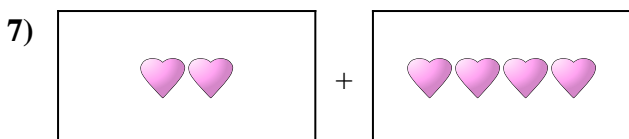
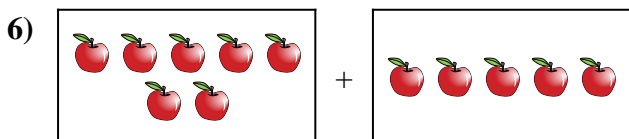
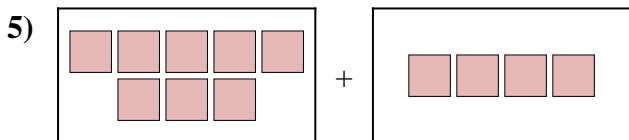
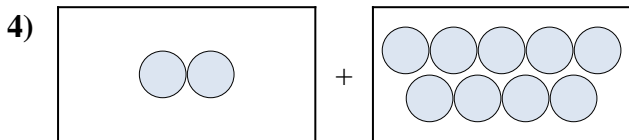
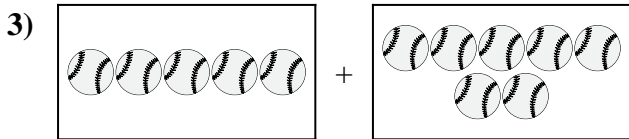

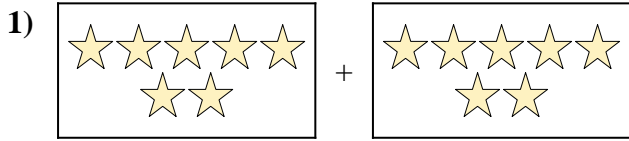
Answers



1. \_\_\_\_\_
2. \_\_\_\_\_
3. \_\_\_\_\_
4. \_\_\_\_\_
5. \_\_\_\_\_
6. \_\_\_\_\_
7. \_\_\_\_\_
8. \_\_\_\_\_
9. \_\_\_\_\_
10. \_\_\_\_\_



Express the visual problem as an equation with answer.



Answers

1.  $7 + 7 = 14$

2.  $6 + 1 = 7$

3.  $5 + 7 = 12$

4.  $2 + 9 = 11$

5.  $8 + 4 = 12$

6.  $7 + 5 = 12$

7.  $2 + 4 = 6$

8.  $9 + 2 = 11$

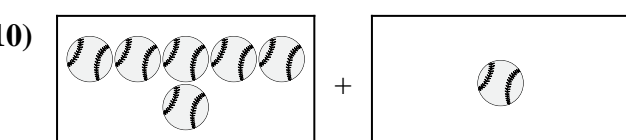
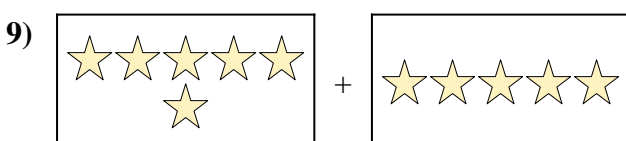
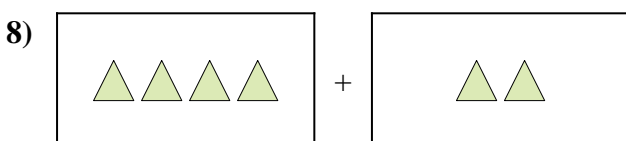
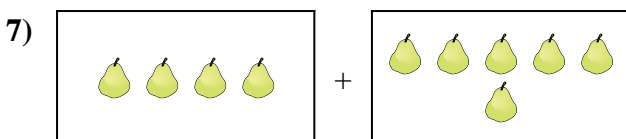
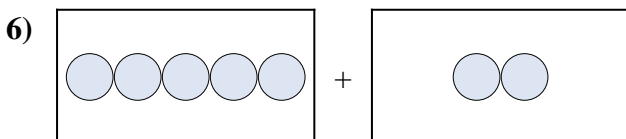
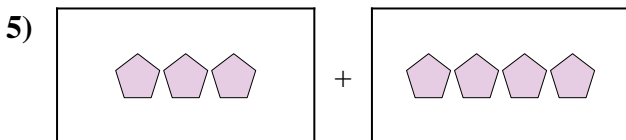
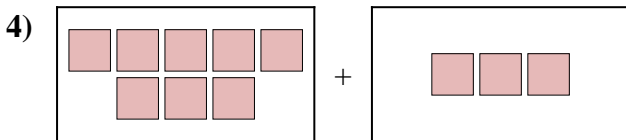

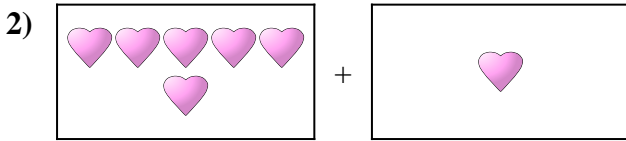
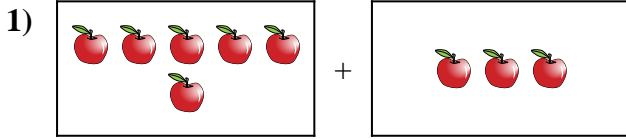
9.  $6 + 1 = 7$

10.  $5 + 10 = 15$



Express the visual problem as an equation with answer.

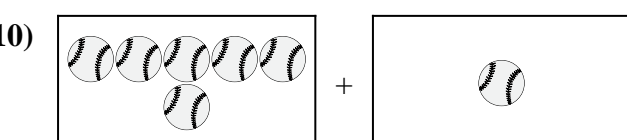
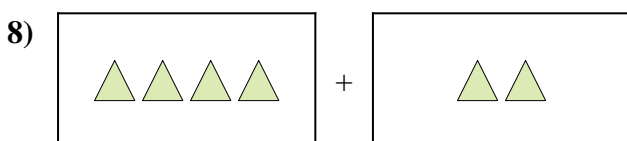
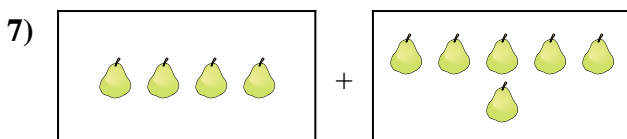
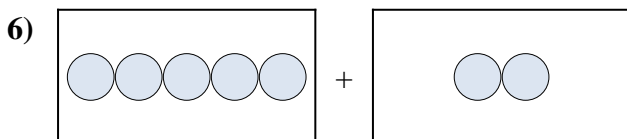
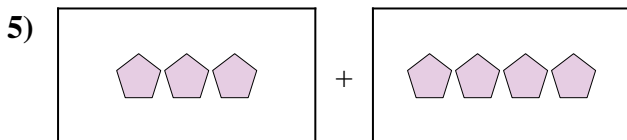
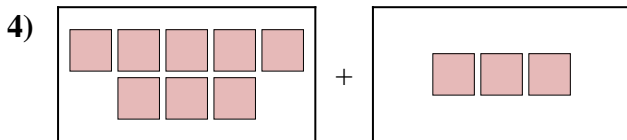

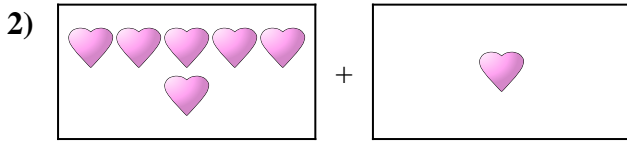
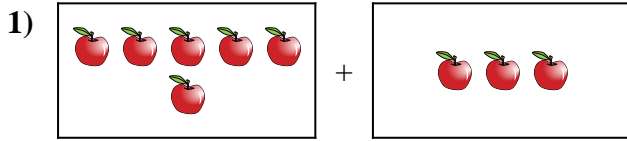
Answers



1. \_\_\_\_\_
2. \_\_\_\_\_
3. \_\_\_\_\_
4. \_\_\_\_\_
5. \_\_\_\_\_
6. \_\_\_\_\_
7. \_\_\_\_\_
8. \_\_\_\_\_
9. \_\_\_\_\_
10. \_\_\_\_\_



Express the visual problem as an equation with answer.



Answers

1.  $6 + 3 = 9$

2.  $6 + 1 = 7$

3.  $10 + 4 = 14$

4.  $8 + 3 = 11$

5.  $3 + 4 = 7$

6.  $5 + 2 = 7$

7.  $4 + 6 = 10$

8.  $4 + 2 = 6$


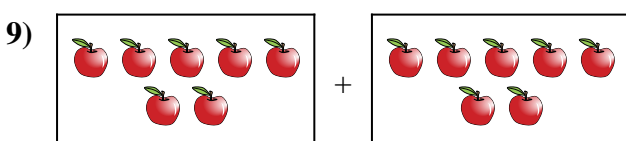
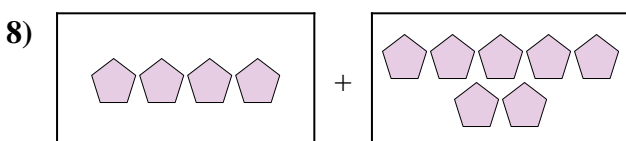
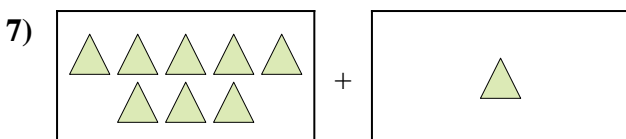
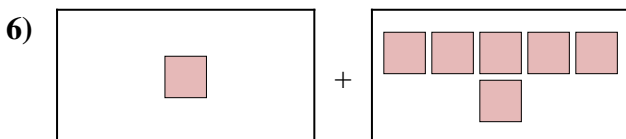
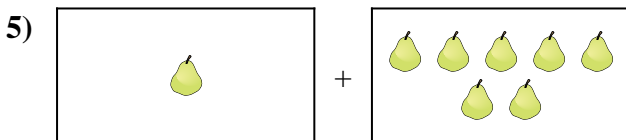
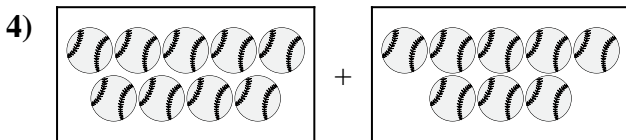
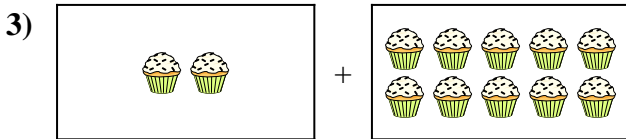
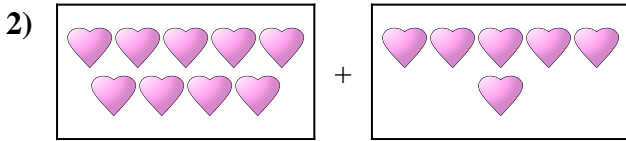
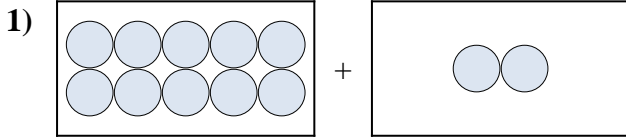
9.  $6 + 5 = 11$

10.  $6 + 1 = 7$



Express the visual problem as an equation with answer.


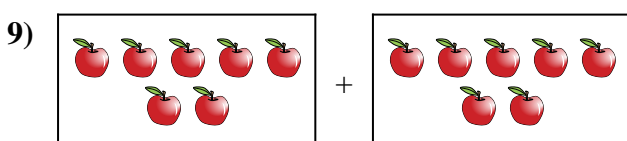
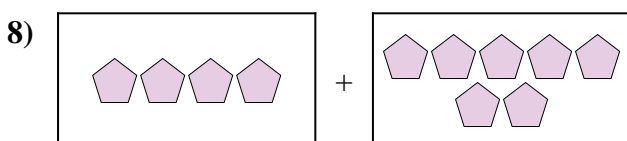
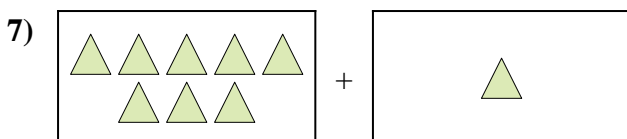
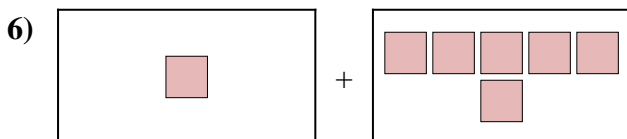
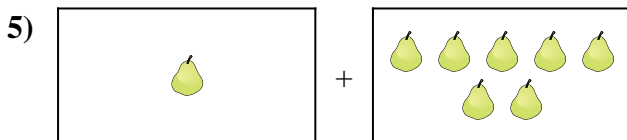
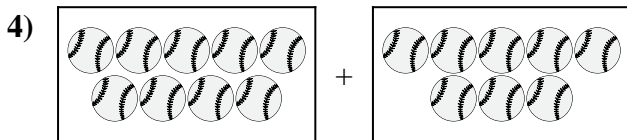
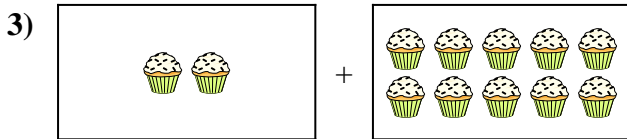
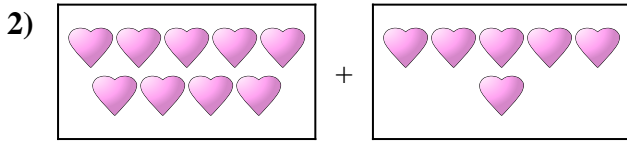
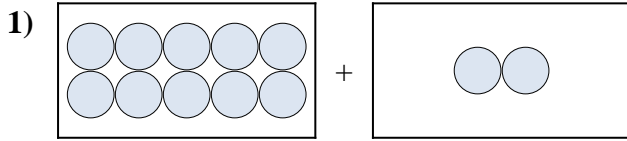
Answers



1. \_\_\_\_\_
2. \_\_\_\_\_
3. \_\_\_\_\_
4. \_\_\_\_\_
5. \_\_\_\_\_
6. \_\_\_\_\_
7. \_\_\_\_\_
8. \_\_\_\_\_
9. \_\_\_\_\_
10. \_\_\_\_\_



Express the visual problem as an equation with answer.



Answers

1.  $10 + 2 = 12$

2.  $9 + 6 = 15$

3.  $2 + 10 = 12$

4.  $9 + 8 = 17$

5.  $1 + 7 = 8$

6.  $1 + 6 = 7$

7.  $8 + 1 = 9$

8.  $4 + 7 = 11$

9.  $7 + 7 = 14$

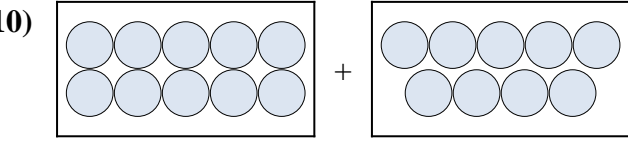
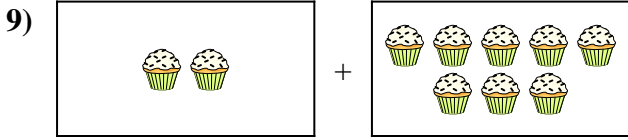
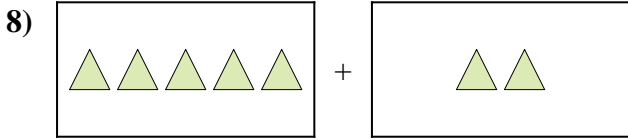
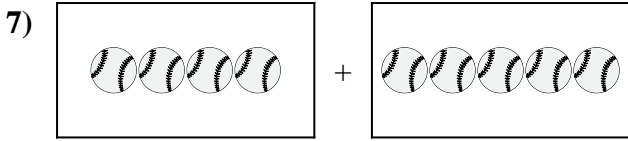
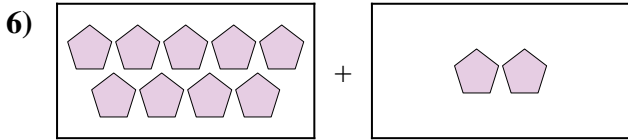
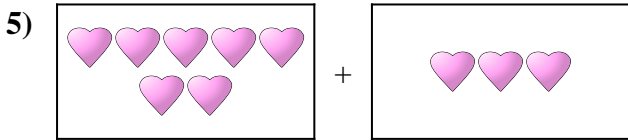
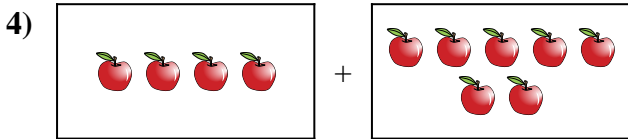
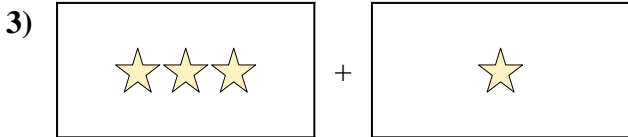
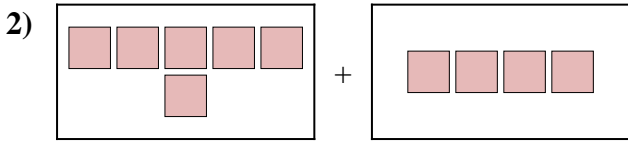
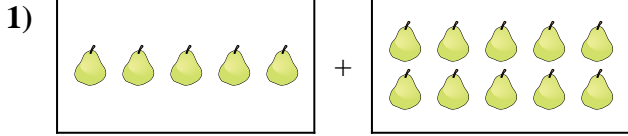
10.  $9 + 7 = 16$





Express the visual problem as an equation with answer.

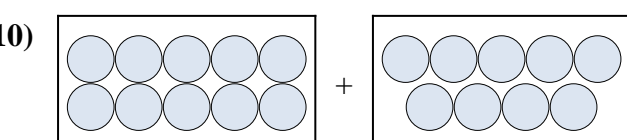
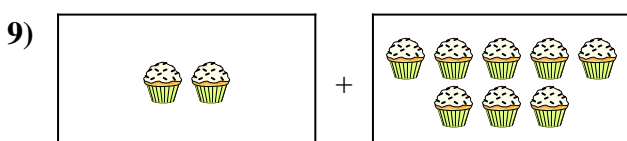
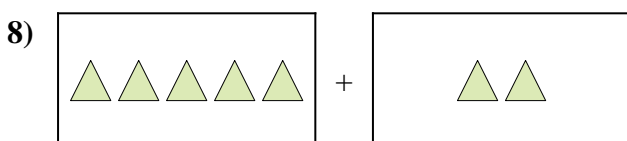
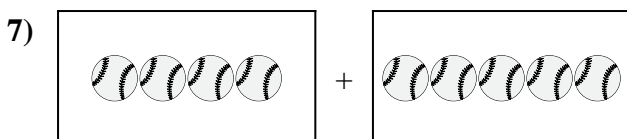
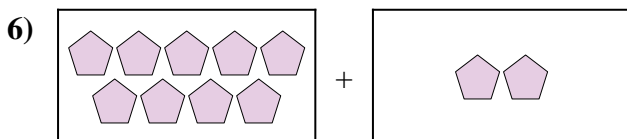
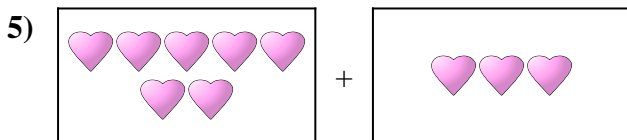
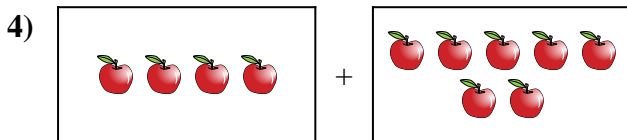
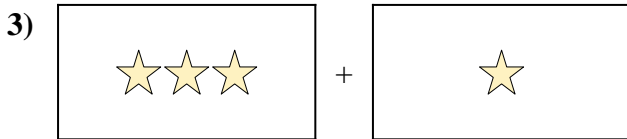
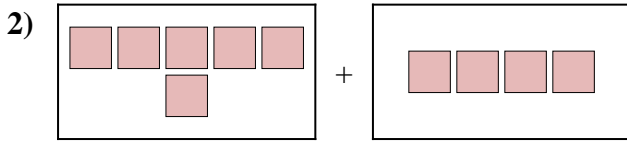
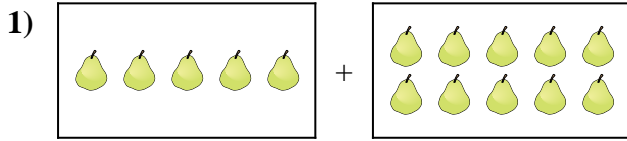
Answers



1. \_\_\_\_\_
2. \_\_\_\_\_
3. \_\_\_\_\_
4. \_\_\_\_\_
5. \_\_\_\_\_
6. \_\_\_\_\_
7. \_\_\_\_\_
8. \_\_\_\_\_
9. \_\_\_\_\_
10. \_\_\_\_\_



Express the visual problem as an equation with answer.



Answers

1.  $5 + 10 = 15$

2.  $6 + 4 = 10$

3.  $3 + 1 = 4$

4.  $4 + 7 = 11$

5.  $7 + 3 = 10$

6.  $9 + 2 = 11$

7.  $4 + 5 = 9$

8.  $5 + 2 = 7$

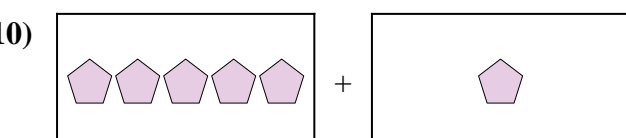
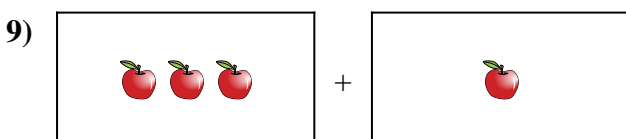
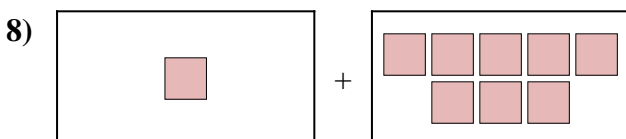
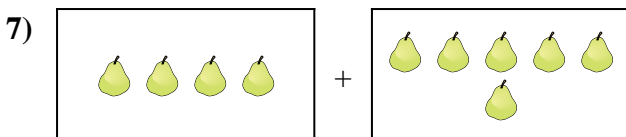

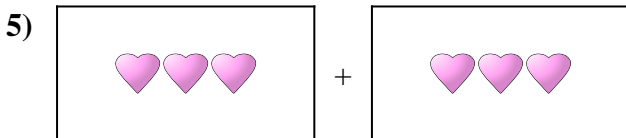
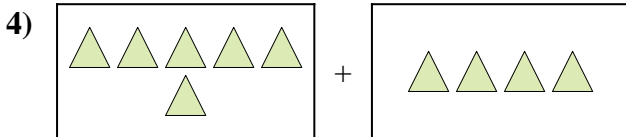
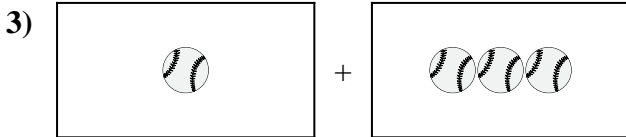
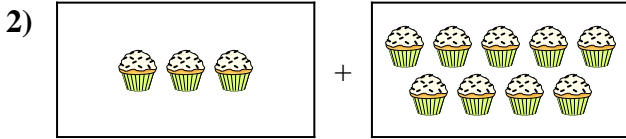
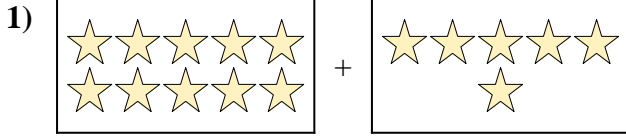
9.  $2 + 8 = 10$

10.  $10 + 9 = 19$



Express the visual problem as an equation with answer.

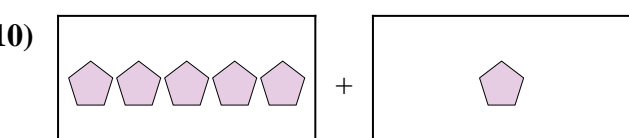
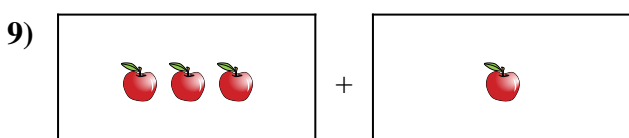
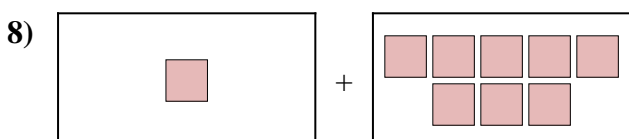
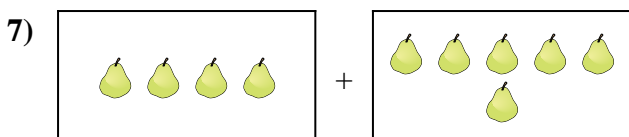

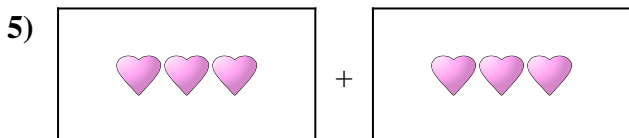
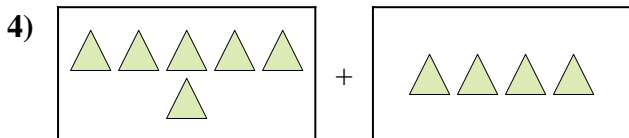
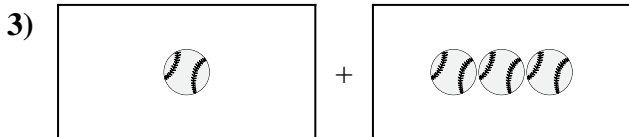
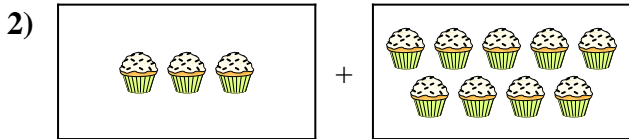
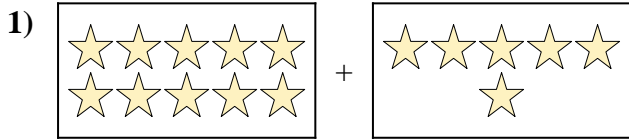
Answers



1. \_\_\_\_\_
2. \_\_\_\_\_
3. \_\_\_\_\_
4. \_\_\_\_\_
5. \_\_\_\_\_
6. \_\_\_\_\_
7. \_\_\_\_\_
8. \_\_\_\_\_
9. \_\_\_\_\_
10. \_\_\_\_\_



Express the visual problem as an equation with answer.



Answers

1. **10 + 6 = 16**

2. **3 + 9 = 12**

3. **1 + 3 = 4**

4. **6 + 4 = 10**

5. **3 + 3 = 6**

6. **7 + 3 = 10**

7. **4 + 6 = 10**

8. **1 + 8 = 9**

9. **3 + 1 = 4**

10. **5 + 1 = 6**